

1. Work out $17.6 + 8.53$
(1 mark)2. Work out $8.4 - 2.64$
(1 mark)3. Work out 0.3×24
(2 marks)4. Work out $\text{£}17.34 \div 2$
(2 marks)

5. Round 0.2351 to the nearest 2 dp

.....
(1 mark)6. Work out $-4 + (-9)$
(1 mark)7. What is $\frac{2}{5}$ of 45.....
(1 mark)

8. Find 30% of 150

.....
(1 mark)9. Convert $\frac{2}{3}$ to a decimal.....
(1 mark)10. Calculate $9^2 - \sqrt{9}$
(2 marks)

11. Write down the nth term

10, 20, 30, 40, 50

.....
(1 mark)

12. Simplify

 $\frac{9}{21}$
(1 mark)

Name : Class..... Score.....

13. Simplify $4a + 2b + 9a - 7b$

 (2 marks)

14. Simplify $4j \times 9k$

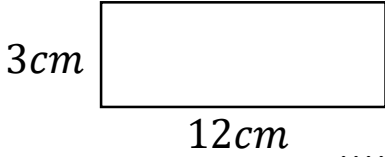
 (1 mark)

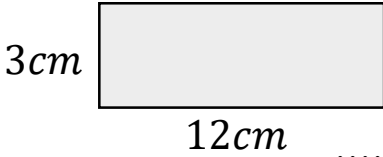
15. Expand $4(5a + 4)$

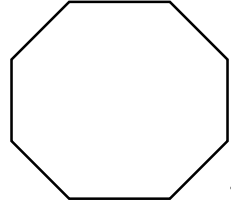
 (2 marks)

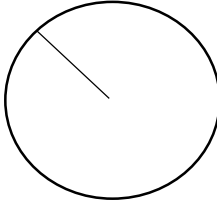
16. Write down all the factors of 20


 (1 mark)

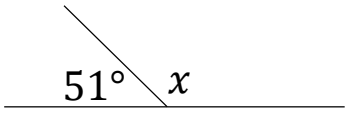
17. Calculate the perimeter

 (1 mark)

18. Calculate the area

 (1 mark)

19. Name this shape

 (1 mark)

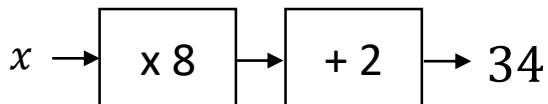
20. Name this part of a circle

 (1 mark)

21. Draw all the lines of symmetry

 (1 mark)

22. Calculate x

 $x = \dots\dots\dots$
 (1 mark)

23. Workout
 $36 \div 6 + 2^2$

 (2 marks)

24. Solve

 $x = \dots\dots\dots$
 (1 mark)